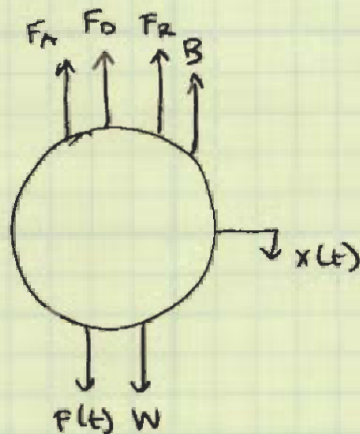


PROBLEM 1:

a)



where: $B = \text{BOUYANT FORCE}$
 $W = \text{WEIGHT}$
 $F_A = \text{ADDED MASS FORCE}$
 $F_D = \text{DAMPING FORCE}$
 $F_R = \text{RESTORING FORCE}$
 $F(t) = \text{FORCE DUE TO OSCILLATIONS}$

NOTE: ALL FORCES ACTING THROUGH CENTER OF SPHERE.

CYLINDER IS NEUTRALLY BUOYANT SO $B = W$ AND THEY CANCEL OUT

$$b) [m + m_a] \ddot{x}(t) + b \dot{x}(t) + k x(t) = f_0 \cos(\omega t)$$

where: $m = \text{mass}$
 $m_a = \text{added mass coefficient}$
 $b = \text{damping coefficient}$
 $k = \text{restoring coefficient}$
 $f_0 = \text{amplitude of forcing function}$

$$c) \omega_N = \sqrt{\frac{k}{m + m_a}}$$

$$d) x(t) = x_0 \cos(\omega t + \psi)$$

$$x(\omega) = x_0 e^{i\omega t} e^{i\psi}$$

$$\dot{x}(\omega) = x_0 i\omega e^{i\omega t} e^{i\psi}$$

$$\ddot{x}(\omega) = -x_0 \omega^2 e^{i\omega t} e^{i\psi}$$

$$f(t) = f_0 \cos(\omega t)$$

$$f(\omega) = f_0 e^{i\omega t}$$

Note: Both sides have $\text{Re}\{ \}$ }
 so these terms were omitted.

$$[-(m + m_a) x_0 \omega^2 e^{i\psi} + b x_0 i\omega e^{i\psi} + k x_0 e^{i\psi}] e^{i\omega t} = f_0 e^{i\omega t}$$

$$x_0 [-(m + m_a) \omega^2 + bi\omega + k] e^{i\psi} = f_0$$

$$x_0 = \frac{f_0}{-(m + m_a) \omega^2 + bi\omega + k} e^{-i\psi}$$

PROBLEM 2:

COMPLEX NUMBERS

$$z = x + iy$$

$$\text{magnitude} = r = |z| = \sqrt{x^2 + y^2}$$

$$\text{phase} = \theta = \tan^{-1}\left(\frac{y}{x}\right)$$

$$a) 1 + i\sqrt{3} \quad r = \sqrt{1^2 + (\sqrt{3})^2} = \sqrt{4} = 2$$

$$\theta = \tan^{-1}\left(\frac{\sqrt{3}}{1}\right) = \frac{\pi}{3}$$

$$b) \left(\frac{1+i\sqrt{3}}{\sqrt{3}+i}\right)\left(\frac{\sqrt{3}-i}{\sqrt{3}-i}\right) = \frac{\sqrt{3} + 3i - i - i^2\sqrt{3}}{3 - i^2} = \frac{2\sqrt{3} + 2i}{4} = \frac{\sqrt{3} + i}{2}$$

$$r = \sqrt{\left(\frac{\sqrt{3}}{2}\right)^2 + \left(\frac{1}{2}\right)^2} = \sqrt{\frac{3}{4} + \frac{1}{4}} = \sqrt{1} = 1$$

$$\theta = \tan^{-1}\left(\frac{1/2}{\sqrt{3}/2}\right) = \tan^{-1}\left(\frac{1}{\sqrt{3}}\right) = \frac{\pi}{6}$$

$$c) -5 - 5i \quad r = \sqrt{(-5)^2 + (-5)^2} = \sqrt{2 \cdot 25} = 5\sqrt{2}$$

$$\theta = \tan^{-1}\left(\frac{-5}{-5}\right) = \tan^{-1}(1) = \frac{5\pi}{4}$$

$$d) i(1+i)e^{i\pi/6}$$

$\begin{matrix} \uparrow & \uparrow & \uparrow \\ (1) & (2) & (3) \end{matrix}$

REMEMBER: $z = x + iy = re^{i\theta}$ PUT 3 COMPLEX NUMBERS INTO POLAR FORM
AND THEN MULTIPLY

$$0 + i \rightarrow r = 1, \theta = \frac{\pi}{2}, z = e^{i\pi/2} \quad (1)$$

$$1 + i \rightarrow r = \sqrt{2}, \theta = \frac{\pi}{4}, z = \sqrt{2}e^{i\pi/4} \quad (2)$$

$$z = e^{i\pi/6} \quad (3)$$

$$z = (e^{i\pi/6})(\sqrt{2}e^{i\pi/4})(e^{i\pi/6}) = \sqrt{2}e^{i\frac{11\pi}{12}}$$

$$r = \sqrt{2}$$

$$\theta = \frac{11\pi}{12}$$

PROBLEM 3:

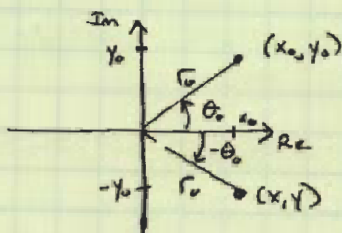
$$z_0 = x_0 + iy_0 = r_0 e^{i\theta_0}$$

$$z = x + iy$$

FIND (x, y) IN TERMS OF (x_0, y_0)

a) $z = r_0 e^{-i\theta_0}$

$$r = r_0 \quad \theta = -\theta_0$$

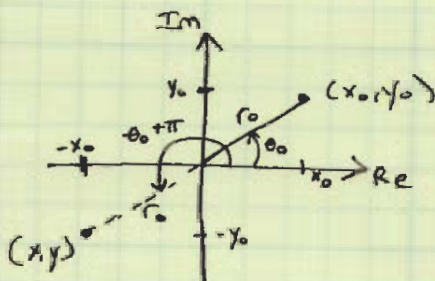


$$x = x_0$$

$$y = -y_0$$

b) $z = r_0 e^{i(\theta_0 + \pi)}$

$$r = r_0 \quad \theta = \theta_0 + \pi$$

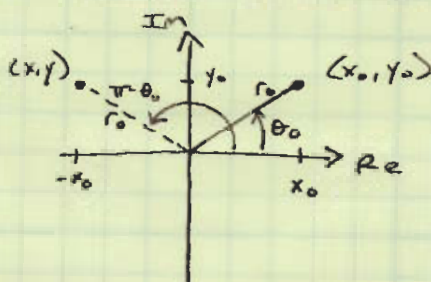


$$x = -x_0$$

$$y = -y_0$$

c) $z = r_0 e^{-i(\theta_0 - \pi)}$

$$r = r_0 \quad \theta = \pi - \theta_0$$

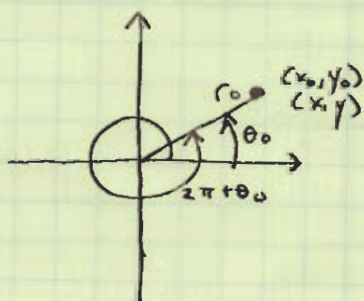


$$x = -x_0$$

$$y = y_0$$

d) $z = r_0 e^{i(\theta_0 + 2\pi)}$

$$r = r_0 \quad \theta = \theta_0 + 2\pi$$



$$x = x_0$$

$$y = y_0$$

PROBLEM 4:

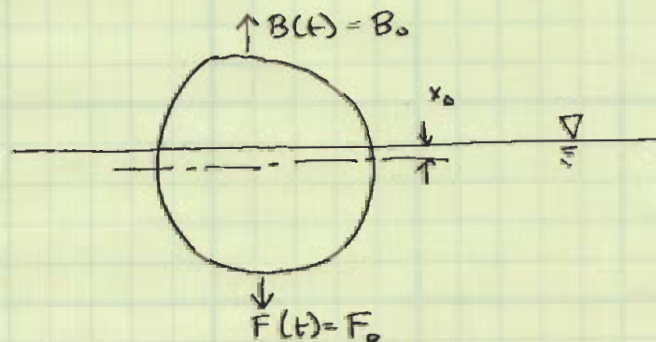
EQUATION OF MOTION: $\ddot{x}(t) [M + A_{33}] + \dot{x}(t) [B_{33}] + x(t) [C_{33}] = F(t)$
IN HEAVE

PUSH OBJECT DOWN AND HOLD IT AT DISPLACEMENT $x(t) = x_0$

THEREFORE $\ddot{x}(t) = 0$ $\dot{x}(t) = 0$

AND $x_0 [C_{33}] = F(t)$

$F(t)$ IS THE FORCE REQUIRED TO DISPLACE THE EXTRA WATER



Therefore, $F_0 = B_0 =$ BOUOYANCY FORCE OF DISPLACING EXTRA WATER

FOR SPHERE: $B_0 = \rho_f \cdot g \cdot V_b$ where $V_b \cong x_0 \cdot A_{wp} = x_0 \cdot \pi \cdot \frac{d^2}{4}$

$$B_0 \cong \rho_f \cdot g \cdot x_0 \cdot A_{wp}$$

THEREFORE $x_0 [C_{33}] \cong F_0 \cong \rho_f \cdot g \cdot x_0 \cdot A_{wp}$

$$C_{33} \cong \rho_f \cdot g \cdot A_{wp}$$

NOTE:

" \cong " is used because there is a slight curvature of the body at the waterline.

FOR CYLINDER: $B_0 = \rho_f \cdot g \cdot V_b$ where $V_b \cong x_0 \cdot A_{wp} = x_0 \cdot d \cdot L$

$$B_0 \cong \rho_f \cdot g \cdot x_0 \cdot A_{wp}$$

THEREFORE $x_0 [C_{33}] = F_0 \cong \rho_f \cdot g \cdot x_0 \cdot A_{wp}$

$$C_{33} \cong \rho_f \cdot g \cdot A_{wp}$$

PROBLEM 5:

$$a) \quad y(t) = \int_0^{t+d} u(s) ds$$

→ FIRST CHECK LINEARITY:

SUBSTITUTE $a_1 u_1(s) + a_2 u_2(s)$ FOR $u(s)$

$$\begin{aligned} \int_0^{t+d} [a_1 u_1(s) + a_2 u_2(s)] ds &= a_1 \int_0^{t+d} u_1(s) ds + a_2 \int_0^{t+d} u_2(s) ds \\ &= a_1 y_1(t) + a_2 y_2(t) \quad \therefore \text{IT IS LINEAR} \end{aligned}$$

→ NOW CHECK TIME INVARIANCE

SUBSTITUTE $u(s+\tau)$ FOR $u(s)$ ON THE R.H.S.

$$\int_0^{t+d} u(s+\tau) ds$$

$$\text{LET } \xi = s + \tau$$

$$d\xi = ds$$

$$\text{WHEN } s = t+d \rightarrow \xi = t+d+\tau$$

$$s = 0 \rightarrow \xi = \tau$$

$$= \int_{\tau}^{t+d+\tau} u(\xi) d\xi$$

NOW SUBSTITUTE $y(t+\tau)$ FOR $y(t)$ ON L.H.S.
AND $(t+\tau)$ FOR (t) ON R.H.S.

$$y(t+\tau) = \int_0^{t+\tau+d} u(s) ds$$

NOW CHECK TO SEE IF THESE ARE EQUAL

$$\int_{\tau}^{t+d+\tau} u(\xi) d\xi \quad ? \quad \int_0^{t+\tau+d} u(s) ds$$

NO THEY ARE NOT EQUAL BECAUSE OF
DIFFERENT LIMITS OF INTEGRATION

∴ IT IS NOT TIME INVARIANT

PROBLEM 5, CONT:

$$b) \quad y(t) = \int_{t-\alpha}^{t+\alpha} [u(s)]^2 ds$$

→ FIRST CHECK LINEARITY:

SUBSTITUTE $a_1 u_1(s) + a_2 u_2(s)$ FOR $u(s)$

$$\int_{t-\alpha}^{t+\alpha} [a_1 u_1(s) + a_2 u_2(s)]^2 ds$$

BY INSPECTION THIS IS NOT EQUAL TO

$$a_1 y_1(t) + a_2 y_2(t) \text{ WHICH } = a_1 \int_{t-\alpha}^{t+\alpha} [u_1(s)]^2 ds + a_2 \int_{t-\alpha}^{t+\alpha} [u_2(s)]^2 ds$$

∴ IT IS NOT LINEAR

→ NOW CHECK TIME INVARIANCE

SUBSTITUTE $u(s+\tau)$ FOR $u(s)$ ON THE R.H.S.

$$\int_{t-\alpha}^{t+\alpha} [u(s+\tau)]^2 ds$$

$$\text{LET } \xi = s + \tau \quad d\xi = ds$$

$$\text{WHEN } s = t + \alpha \rightarrow \xi = t + \alpha + \tau$$

$$s = t - \alpha \rightarrow \xi = t - \alpha + \tau$$

$$= \int_{t-\alpha+\tau}^{t+\alpha+\tau} [u(\xi)]^2 d\xi$$

NOW SUBSTITUTE $y(t+\tau)$ FOR $y(t)$ ON THE L.H.S. AND $(t+\tau)$ FOR (t) ON R.H.S.

$$y(t+\tau) = \int_{t+\tau-\alpha}^{t+\tau+\alpha} [u(s)]^2 ds$$

NOW CHECK TO SEE IF THESE ARE EQUAL

$$\int_{t-\alpha+\tau}^{t+\alpha+\tau} [u(\xi)]^2 d\xi \quad ? \quad \int_{t+\tau-\alpha}^{t+\tau+\alpha} [u(s)]^2 ds$$

YES THEY ARE EQUAL SO

IT IS TIME INVARIANT

PROBLEM 5, CONT:

$$c) y(t) = \alpha \left| \frac{du(t)}{dt} \right|$$

→ FIRST CHECK LINEARITY

SUBSTITUTE $a_1 \frac{du_1}{dt} + a_2 \frac{du_2}{dt}$ FOR $\frac{du}{dt}$

$$\alpha \left[a_1 \frac{du_1}{dt} + a_2 \frac{du_2}{dt} \right] \left| \left[a_1 \frac{du_1}{dt} + a_2 \frac{du_2}{dt} \right] \right|$$

BY INSPECTION, THIS DOES NOT EQUAL

$$a_1 y_1 + a_2 y_2 \text{ WHICH } = a_1 \alpha \left| \frac{du_1}{dt} \right| + a_2 \alpha \left| \frac{du_2}{dt} \right|$$

∴ IT IS NOT LINEAR

→ NOW CHECK TIME INVARIANCE

SUBSTITUTE $\frac{du(t+\tau)}{dt}$ FOR $\frac{du(t)}{dt}$ ON THE R.H.S.

$$\alpha \left| \frac{du(t+\tau)}{dt} \right|$$

NOW SUBSTITUTE $y(t+\tau)$ FOR $y(t)$ ON R.H.S.

AND $(t+\tau)$ FOR (t) ON L.H.S.

$$y(t+\tau) = \alpha \left| \frac{du(t+\tau)}{dt} \right|$$

NOW CHECK IF THESE ARE EQUAL:

$$\alpha \left| \frac{du(t+\tau)}{dt} \right| = \alpha \left| \frac{du(t+\tau)}{dt} \right|$$

∴ IT IS TIME INVARIANT

PROBLEM 5, CONT:

$$d) \alpha \ddot{y}(t) + \beta \dot{y}(t) + \gamma y(t) = u(t)$$

→ FIRST CHECK LINEARITY

SUBSTITUTE $a_1 u_1 + a_2 u_2$ FOR u ON THE R.H.S.

$$a_1 u_1 + a_2 u_2 = a_1 [\alpha \ddot{y}_1 + \beta \dot{y}_1 + \gamma y_1] + a_2 [\alpha \ddot{y}_2 + \beta \dot{y}_2 + \gamma y_2]$$

$$= a_1 y_1 + a_2 y_2$$

∴ IT IS LINEAR

→ NOW CHECK TIME INVARIANCE

SUBSTITUTE $u(t+\tau)$ FOR $u(t)$ ON R.H.S.

$$u(t+\tau)$$

SUBSTITUTE $y(t+\tau)$ FOR $y(t)$ ON LHS AND

$(t+\tau)$ FOR (t) ON R.H.S.

$$\alpha \ddot{y}(t+\tau) + \beta \dot{y}(t+\tau) + \gamma y(t+\tau) = u(t+\tau)$$

NOW CHECK IF THESE ARE EQUAL

$$u(t+\tau) = u(t+\tau)$$

THEREFORE IT IS TIME INVARIANT

⇒ NOTICE THAT THE DERIVATIVE OF A FUNCTION IS A LINEAR, TIME INVARIANT OPERATOR ON THAT FUNCTION. THIS IS AN IMPORTANT CONCEPT TO REMEMBER.